

Discover the Star within you and Get Rewarded

Paper Code: 11



ACHIEVER'S
ACADEMY

Presents

आरम्भ

सुनहरे भविष्य का

TEST OF BRILLIANCE

SCHOLARSHIP EXAM



SCHOLARSHIP EXAM - 2021

CLASS - 7th

Duration : 1.00 hours

Maximum marks : 200

Instruction to Candidates

- CP Star Test consists of total 50 questions and has been divided in three sections as follows:

a. Science	24 Questions	Que. No. 01 to 24
b. Maths	16 Questions	Que. No. 25 to 40
c. Mental Ability	10 Questions	Que. No. 41 to 50
- All questions are compulsory.
- All the answers will be encircled in OMR sheet which is being provided along with this paper.
- For every correct answer marked by you, 4 marks will be allotted.
- For every incorrect answer marked by you, 1 marks will be deducted.
- Use of calculator is not permitted in any case.
- Any kind of malpractice will expel you from exam immediately.
- For any confusion please talk to the invigilator in the examination hall.

SECTION - A [SCIENCE]

1. Water reaches the leaves from the root by
(1) stomata (2) phloem
(3) xylem (4) none
2. The chemical used in starch test is
(1) safranin (2) blue ink
(3) iodine (4) litmus
3. The semi-solid mass which is produced after thoroughly mix up of food and gastric juice is called
(1) bulus (2) chynal
(3) bile (4) villus
4. The movement of food in food pipe is called
(1) linear movement
(2) rectilinear movement
(3) smooth movement
(4) peristaltic movement
5. Scientific name of mulberry is
(1) legumes (2) morus alba
(3) spirogyra (4) none
6. Which bacterium causes a total blood disease?
(1) rhizobium (2) anthrax
(3) both (1) and (2) (4) none of these
7. What is the normal temperature of a healthy person?
(1) 37°C (2) 37°F
(3) 37K (4) None of these
8. Conduction is the method of transfer of heat in
(1) liquids (2) solids
(3) gases (4) vacuum
9. Which of the folloiwng ion is responsible for the acidic nature of hydrochloric acid?
(1) hydrogen ion (2) hydroxide ion
(3) chloride ion (4) hydrochloride ion
10. Tartaric acid is found in
(1) vinegar (2) curd
(3) amla (4) tamarind
11. Ozone layer protects us from harmful
(1) ultraviolet radiation (2) infrared radiation
(3) visibel radiation (4) heat radiation
12. Which of the following changes is accompanied by sound?
(1) Photosynthesis
(2) spoilage of food
(3) explosion of fire works
(4) none
13. Which of the following part of India has hot and dry climate?
(1) Kashmir (2) Rajasthan
(3) Kerala (4) None of these
14. The temperature in polar regions in winter can be as low as
(1) -40°C (2) 34°C
(3) 45°C (4) -37°C

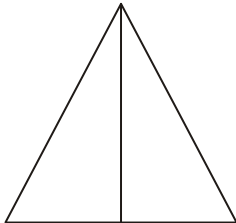
<p>15. The India meteorological department forecasts cyclones with the help of</p> <p>(1) rohini satellite (2) aryabhata satellite (3) insat (INSAT)satellite (4) none of these</p> <p>16. Winds are expected to blow towards the equator, at a latitude of</p> <p>(1) 40⁰N (2) 30⁰N (3) 20⁰N (4) None</p> <p>17. Which physical property of soil is important to us?</p> <p>(1) texture (2) water holding capacity (3) both (1) and (2) (4) None of these</p> <p>18. Availability of water and minerals in the soil for maximum absorption by roots is in</p> <p>(1) B-horizon (2) C-horizon (3) A-horizon (4) None of these</p>	<p>19. The vital biological process of organisms is</p> <p>(1) inspiration (2) respiration (3) transpiration (4) None of these</p> <p>20. A person can hold air in the lungs is-</p> <p>(1) 50 ml (2) 5000 ml (3) 500 ml (4) 0.5 ml</p> <p>21. The percentage of oxygen in exhaled air is</p> <p>(1) 14.4% (2) 4.4 % (3) 16.4 % (4) 0.04%</p> <p>22. The fluid part of the blood is known as</p> <p>(1) membrane (2) plasma (3) RBC (4) WBC</p> <p>23. A spore producing plant is</p> <p>(1) rose (2) potato (3) bread mould (4) ginger</p> <p>24. The zygote develops into</p> <p>(1) A seed (2) An ovule (3) A fruit (4) An embryo</p>
--	--

SECTION - B [MATHS]

25. $(-1) \times (-1) \times (-1) \times \dots \times (-1)$ 10 times is equal to
 (1) 1 (2) -1
 (3) 1 or -1 (4) none of these
26. The additive identity for integers is
 (1) 1 (2) -1
 (3) 0 (4) none of these
27. A water bottle contains 2 litres of water meenu drank $\frac{1}{8}$ of water. How much water did meenu drink.
 (1) $\frac{1}{2}$ litre (2) $\frac{1}{8}$ litre
 (3) $\frac{1}{4}$ litre (4) none of these
28. The solution of the equation $\frac{p}{2} + 1 = 3$ is
 (1) 1 (2) 2
 (3) 3 (4) 4
29. Find the measure of the angle which is double of its complementary angle?
 (1) 60° (2) 30°
 (3) 45° (4) 120°
30. Which of the following pairs of angles is not a pair of supplementary angles?
 (1) $90^\circ, 90^\circ$ (2) $32^\circ, 58^\circ$
 (3) $0^\circ, 180^\circ$ (4) $76^\circ, 104^\circ$
31. The ratio of the measures of the three angles of a triangle is 2 : 3 : 4. the measure of the largest angle is
 (1) 80° (2) 60°
 (3) 40° (4) 180°
32. The ratio of 15 days to 72 hours is
 (1) 2 : 1 (2) 3 : 1
 (3) 4 : 1 (4) 5 : 1
33. Out of 40 children in a class, 10 are boys what is the percentage of boys?
 (1) 10% (2) 40%
 (3) 4% (4) 25%
34. If $\frac{-8}{-9} = \frac{-16}{?}$, then ? =
 (1) 18 (2) -18
 (3) 9 (4) -9
35. The reciprocal of $\frac{-2}{5}$ is
 (1) $-\frac{5}{2}$ (2) $\frac{5}{2}$
 (3) $\frac{2}{5}$ (4) $-\frac{2}{5}$
36. $\frac{7}{12} \div \left(\frac{-7}{12}\right) =$
 (1) 1 (2) -1
 (3) 7 (4) -7
37. Which vertex of $\triangle ABC$ is right angled if $\overline{AB} = 8\text{cm}$, $\overline{AC} = 6\text{cm}$ and $\overline{BC} = 10\text{cm}$.
 (1) $\angle C$ (2) $\angle A$
 (3) $\angle B$ (4) A or C
38. 1 hectare =
 (1) 10 m^2 (2) 100 m^2
 (3) 1000 m^2 (4) 10000 m^2
39. The area of parallelogram of base 5 cm and height 3.2 cm is
 (1) 8 cm^2 (2) 12 cm^2
 (3) 16 cm^2 (4) 20 cm^2
40. How many terms are there in the expression $2p^3 - 3p^2 + 4p + 7$
 (1) 1 (2) 2
 (3) 3 (4) 4

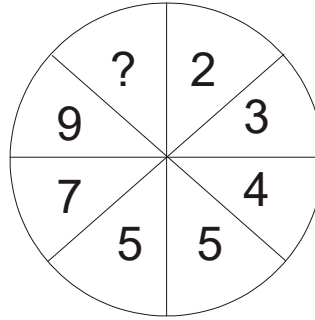
SECTION - C [MENTAL ABILITY]

41. 1, 4, 9, 16 ___?
(1) 20 (2) 25
(3) 36 (4) 30
42. Z, X, V, T, R ___?
(1) S (2) T
(3) P (4) O
43. Find the odd one out:
(1) Car (2) Jeep
(3) Van (4) Cycle
44. Knife : Cut :: Pen : ___?
(1) Pencil (2) Sew
(3) Ink (4) Write
45. 5 : 8 :: 15 : ?
(1) 18 (2) 19
(3) 20 (4) 21
46. 6, 12, 20, 30, ?
(1) 40 (2) 41
(3) 42 (4) 48
47. How many triangles are there in the figure below?



- (1) 2 (2) 3
(3) 4 (4) 1

48.



- (1) 10 (2) 11
(3) 12 (4) 13
49. Find the odd one out-
(1) Square
(2) Rectangle
(3) Triangle
(4) Circle
50. Cotton : White :: Coal : ?
(1) Fire
(2) Mine
(3) Wood
(4) Black



ACHIEVER'S ACADEMY



CAREER POINT

ALWAR BRANCH

NEET | JEE | NTSE | OLYMPIAD | 7th to 10th

13 वर्षों से हर बार लगातार अलवर जिले में
JEE एवं NEET के सर्वश्रेष्ठ परिणाम देने वाला एकमात्र संस्थान

JEE (Main+Adv) Result 2021



Yashvardhan Saini
IIT-ROORKEE



Abhishek Meena
IIT-DELHI



Navneet Meena
IIT-DELHI



Varun Gupta
IIT-HYDERABAD



Himanshu Ghusinga
IIT-DELHI



Girish Kumar
IIT-BHU



Praveen Kumar
IIT-PATNA



Archisha Gupta
IIT-KHARAGPUR



Aman Kumar
IIT-JAMMU



Pushpendra Bairwa
IIT-HYDERABAD



Shelly Agarwal
IIT-KHARAGPUR



Mitansu Meena
IIT-BHU



Divyate Soni
MIT-AGARTALA



Keshavil Ghusinga
NIT-WARANGAL



Priyanshu Jain
IITM-JAIPUR

NEET Result 2021



Moksh Gupta
AIR-4393
Cat.-2321



Bulbul Jain
AIR-9049
Cat.-4285



Nupur Garg
AIR-8056
Cat.-1185



Garvita Khatri
AIR-9163
Cat.-4329



Puneet Mittal
AIR-11335



Sneha Arya
AIR-16766
Cat.-6735



Sachin Dev
AIR-27645
Cat.-11645




Parul Gupta
Cat.-6394



Vedang Vijay
Cat.-13532

Add Success to your preparation
at **ALWAR** with Kota's

BEST



Faculty Team

Coaching System

Personal Care

15, 16 Ganpati Complex, Near Ambedkar Circle, Alwar (Raj.)

Ph: 0144-2700785, 96729-77516, 96729-77581, 85028-33300 | www.careerpoint.ac.in

Kota (H.O.): Career Point Ltd, CP Tower, Road No.1, IPIA, Kota (Raj)